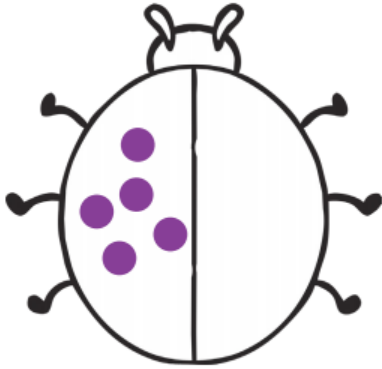



Doubling


When we double we add the same number together e.g $2+2$, $5+5$, $8+8$. Can you double these numbers?



Double 5 is _____




Double 6 is _____




Double 7 is _____



Double 8 is _____



Double 9 is _____



Double 10 is _____

Can you draw your own ladybirds to double some other numbers up to 20?